


Name: _____ Date: _____

Fraction Game


Judy and Greg are playing Fraction Top-It but they have to draw their own cards for each fraction. They decide to draw fractions that look like the Everything Math deck they use in class. Whoever has the larger fraction wins both cards.

- Draw the Everything Math Deck fraction card for each fraction.



Judy gets the fraction

$$\frac{3}{4}$$



Greg gets the fraction

$$\frac{3}{8}$$


- Explain who wins the round and how you know it.

Name: _____ Date: _____

Fraction Game


Ben and Doug are playing Fraction Top-It but they have to draw their own cards for each fraction. They decide to draw fractions that look like the Everything Math deck they use in class.

- Draw the Everything Math Deck fraction card for each fraction.



Ben gets the fraction

$$\frac{1}{6}$$



Greg gets the fraction

$$\frac{1}{4}$$


- Explain who wins the round and how you know it.

Name: _____ Date: _____

Fraction Game


Tanya and Lisa are playing Fraction Top-It but they have to draw their own cards for each fraction. They decide to draw fractions that look like the Everything Math deck they use in class.

- Draw the Everything Math Deck fraction card for each fraction.



Tanya gets the fraction

$$\frac{3}{4}$$



Lisa gets the fraction

$$\frac{7}{8}$$

- Explain who wins the round and how you know it.